

VIDYA BHAWAN BALIKA VIDYA PITH

CLASS- 2

DATE – 05.07.21

SUB -MATHS

S. T - PRAGYA


BASED ON N.C.E.R.T PATTERN

CH - 9 (DIVISION)


WORD PROBLEMS

WORD PROBLEMS

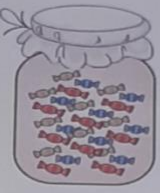
a There are 36 flowers to be arranged in 6 vases. How many flowers will be arranged in each vase ?
Ans.




b There are 72 marbles to be packed in 8 packets equally. How many marbles are there in each packet ?
Ans.




c There are 81 toffees in a jar to be distributed to 9 students. How many toffees will each student get ?
Ans.



d A teacher has 56 stars. She gives 7 stars each to a few students. How many students have received the stars.
Ans.



e There are 90 apple in a basket to be equally put into 5 bags. How many apples are there in each bag.
Ans.



Five empty rounded rectangular boxes are provided for answers on the right side of the page.

f 9 audio CD's contain 189 songs. How many songs are there in each audio CD ?

Ans.



g A milkman has 48 milk packets. If he puts 6 packets in a container, how many containers does he need ?

Ans.



h There are 190 oranges in a basket to be equally put into 5 bags. How many oranges are there in each bag ?

Ans.



i 147 stamps are to be shared equally to 7 boys. How many stamp will each boy get ?

Ans.



j 6 boxes contain 546 marbles in all. If there are an equal number of marbles in all the boxes, how many marbles are there in each box ?

Ans.